

Standard Response Questions. Show all work to receive credit. Please **BOX** your final answer.

1. Given $f(x) = 2\cos(x) - \sin(2x)$

(a) (8 points) Find $f'(x)$.

$$\begin{aligned} f'(x) &= (2\cos x)' - (\sin 2x)' \\ &= 2 \cdot (-\sin x) - [\cos(2x) \cdot (2x)'] \\ &= -2\sin x - [\cos(2x) \cdot 2] \\ &= \boxed{-2\sin x - 2\cos(2x)} \end{aligned}$$

(b) (5 points) Find the slope of the tangent line to $f(x)$ at the point $x = \pi$.

$$\begin{aligned} \text{slope} = f'(\pi) &= -2 \cdot \sin \pi - 2 \cdot \cos(2\pi) & \sin \pi &= 0 \\ &= -2 \cdot 0 - 2 \cdot \cancel{1} & \cos 2\pi &= 1 \\ &= 0 - 2 = \boxed{-2} \end{aligned}$$

(c) (5 points) Find the equation of the tangent line to $f(x)$ at the point where $x = \pi$.

Tangent line equation: $y = f'(a) \cdot (x - a) + f(a)$

$a = \pi$, slope $= f'(\pi) = -2$

$$\begin{aligned} f(\pi) &= 2\cos \pi - \sin(2\pi) = 2 \cdot (-1) - 0 \\ &= -2 \end{aligned}$$

$\sin 2\pi = 0$, $\cos \pi = -1$

equation: $\boxed{y = -2 \cdot (x - \pi) + (-2)}$

2. (a) (12 points) Use the definition of the derivative to compute the derivative of $f(x) = 5x + \sqrt{x}$.

$$\begin{aligned}
 f'(x) &= \lim_{h \rightarrow 0} \frac{f(x+h) - f(x)}{h} \\
 &= \lim_{h \rightarrow 0} \frac{5(x+h) + \sqrt{x+h} - (5x + \sqrt{x})}{h} \\
 &= \lim_{h \rightarrow 0} \frac{\cancel{5x} + 5h + \sqrt{x+h} - \cancel{5x} - \sqrt{x}}{h} \\
 &= \lim_{h \rightarrow 0} \frac{5h + \sqrt{x+h} - \sqrt{x}}{h} \\
 &= \lim_{h \rightarrow 0} \frac{\cancel{5h}}{\cancel{h}} + \frac{\sqrt{x+h} - \sqrt{x}}{h} \\
 &= \lim_{h \rightarrow 0} 5 + \frac{(\sqrt{x+h} - \sqrt{x})(\sqrt{x+h} + \sqrt{x})}{h(\sqrt{x+h} + \sqrt{x})} \\
 &= \lim_{h \rightarrow 0} 5 + \frac{(\sqrt{x+h})^2 - (\sqrt{x})^2}{h(\sqrt{x+h} + \sqrt{x})} \\
 &= \lim_{h \rightarrow 0} 5 + \frac{x+h-x}{h(\sqrt{x+h} + \sqrt{x})} \\
 &= \lim_{h \rightarrow 0} 5 + \frac{\cancel{x} + h - \cancel{x}}{h(\sqrt{x+h} + \sqrt{x})} \\
 &= \lim_{h \rightarrow 0} 5 + \frac{1}{\sqrt{x+h} + \sqrt{x}} \\
 &= 5 + \frac{1}{\sqrt{x+0} + \sqrt{x}} \\
 &= \boxed{5 + \frac{1}{2\sqrt{x}}}
 \end{aligned}$$

- (b) (6 points) Use your answer in part (a) to find an equation for the tangent line to $f(x)$ when $x = 4$.

$$\text{slope} = f'(4) = 5 + \frac{1}{2\sqrt{4}} = 5 + \frac{1}{2 \cdot 2} = 5 + \frac{1}{4} = \frac{21}{4}$$

$$\text{point: } (4, f(4)) \quad f(4) = 5 \cdot 4 + \sqrt{4} = 20 + 2 = 22 \\ (4, 22)$$

Point-slope formula:

$$\boxed{y = \frac{21}{4} \cdot (x - 4) + 22}$$

3. At time t , the position of an object is given by the function $s = \frac{t^3}{3} - 2t^2 + 3t - 10$.

(a) (6 points) Find the object's acceleration each time the velocity is zero.

$$v(t) = s'(t) = \left(\frac{t^3}{3} - 2t^2 + 3t - 10\right)' = \frac{1}{3} \cdot 3 \cdot t^2 - 2 \cdot 2t + 3 - 0 = \boxed{t^2 - 4t + 3}$$

$$a(t) = v'(t) = (t^2 - 4t + 3)' = \boxed{2t - 4}$$

$$v(t) = t^2 - 4t + 3 = 0 \Leftrightarrow (t-1)(t-3) = 0 \Leftrightarrow t=1, t=3.$$

$$t=1, a(1) = 2 \cdot 1 - 4 = \boxed{-2}$$

$$t=3, a(3) = 2 \cdot 3 - 4 = \boxed{2}$$

(b) (6 points) Find the object's velocity each time the acceleration is zero.

$$a(t) = 2t - 4 = 0 \Rightarrow t=2.$$


$$\Rightarrow v(2) = 2^2 - 4 \cdot 2 + 3 = 4 - 8 + 3 = \boxed{-1}$$

☆☆ (c) (6 points) Find the total distance travelled by the object from $t=0$ to $t=2$.

Notice $v(t) = t^2 - 4t + 3 = (t-1)(t-3)$

$0 < t < 1$, $v(t) > 0$, moving forward

$1 < t < 3$, $v(t) < 0$, moving backward



Therefore, the distance travelled from $t=0$ to $t=2$ is

$$s(0) = 0 - 10 = -10, \quad s(1) = \frac{1}{3} - 2 + 3 - 10 = -\frac{26}{3}, \quad s(2) = \frac{8}{3} - 2 \cdot 2^2 + 3 \cdot 2 - 10 = -\frac{28}{3}$$

$$\text{Distance} = s(1) - s(0) + s(1) - s(2)$$

$$= \left(-\frac{26}{3} + 10\right) + \left(-\frac{26}{3} + \frac{28}{3}\right) = \frac{4}{3} + \frac{2}{3} = \boxed{2}$$

4. Differentiate the following functions. You need not simplify your answers.

(a) (6 points) $y = 3x^4 + 2x \sin(x)$

$$\begin{aligned} y' &= (3 \cdot x^4)' + (2x \cdot \sin x)' \\ &= 3 \cdot 4 \cdot x^3 + \underbrace{(2x)' \cdot \sin x + 2x \cdot (\sin x)'} \\ &= \boxed{12 \cdot x^3 + 2 \cdot \sin x + 2x \cdot \cos x} \end{aligned}$$

(b) (6 points) $f(x) = \frac{\sqrt{x}}{1+x^2}$

$$\begin{aligned} f'(x) &= \frac{(\sqrt{x})'(1+x^2) - \sqrt{x}(1+x^2)'}{(1+x^2)^2} \\ &= \boxed{\frac{\frac{1}{2} \cdot x^{\frac{1}{2}-1} \cdot (1+x^2) - \sqrt{x} \cdot 2x}{(1+x^2)^2}} \end{aligned}$$

$$\begin{aligned} \sqrt{x} &= x^{\frac{1}{2}}, & (\sqrt{x})' &= (x^{\frac{1}{2}})' = \frac{1}{2} \cdot x^{\frac{1}{2}-1} \\ (1+x^2)' &= 0 + (x^2)' & &= 0 + 2 \cdot x \end{aligned}$$


(c) (6 points) $r(\theta) = \sqrt{2\theta + \sin(5\theta)}$

Outer: $\sqrt{\quad}$ Outer' = $(\sqrt{\quad})' = (\quad^{\frac{1}{2}})' = \frac{1}{2} \cdot (\quad)^{-\frac{1}{2}}$ Plug in $\frac{1}{2} (2\theta + \sin(5\theta))^{-\frac{1}{2}}$

Inner: $2\theta + \sin(5\theta)$, Inner' = $2 + (\sin(5\theta))' = 2 + \cos(5\theta) \cdot 5$

$$r'(\theta) = \boxed{\frac{1}{2} \cdot (2\theta + \sin(5\theta))^{-\frac{1}{2}} \cdot [2 + \cos(5\theta) \cdot 5]}$$

5. (18 points) A kite is flying at an angle of elevation of $\frac{\pi}{3}$ radians. The kite string is being taken in at the rate of 1 foot per second. If the angle of elevation does not change, how fast is the kite losing altitude?



Target functions: string's length $L(t)$, rate $L'(t) = -1$
 kite's height $h(t)$, vertical velocity $h'(t)$ (to be found)

Relation: $h(t) = L(t) \cdot \sin \frac{\pi}{3}$ (Right triangle)

$$\Leftrightarrow h(t) = L(t) \cdot \frac{\sqrt{3}}{2} = \frac{\sqrt{3}}{2} \cdot L(t)$$

Take derivative: $h'(t) = \frac{\sqrt{3}}{2} \cdot L'(t)$

Plug in $L'(t) = -1$

$$\Rightarrow h'(t) = \frac{\sqrt{3}}{2} \cdot (-1) = \boxed{\frac{\sqrt{3}}{2} \text{ ft/s}}$$

Multiple Choice. Circle the best answer. No work needed. No partial credit available.

6. (7 points) Find c such that the function $f(x) = \begin{cases} x^2 - 10, & \text{if } x \leq c \\ 10x - 35, & \text{if } x > c \end{cases}$ is continuous everywhere.

- A. $\sqrt{10}$
- B. 5
- C. 10
- D. 20
- E. None of the above.

only point in issue is $x=c$.
 Plug in: $c^2 - 10 = 10c - 35$
 $\Leftrightarrow c^2 - 10c + 25 = 0$
 $\Leftrightarrow (c-5)^2 = 0$
 $\Leftrightarrow c = 5$

7. (7 points) $f(x) = \frac{x^2 - 9}{x^2 - 9x + 18}$ is continuous on:

- A. $(-\infty, -3) \cup (-3, 3) \cup (3, 6) \cup (6, \infty)$
- B. $(-\infty, 6) \cup (6, \infty)$
- C. $(-\infty, 3) \cup (3, \infty)$
- D. $(-\infty, 3) \cup (3, 6) \cup (6, \infty)$
- E. None of the above.

$f(x) = \frac{x^2 - 9}{x^2 - 9x + 18}$ is continuous on its domain.
 Denominator \neq Zero.
 $\Leftrightarrow x^2 - 9x + 18 \neq 0$
 $\Leftrightarrow (x-3)(x-6) \neq 0$
 $\Leftrightarrow x \neq 3$ and $x \neq 6$.

$f(x)$ is continuous everywhere except 3 and 6.

8. (7 points) Consider proving that $\lim_{x \rightarrow 3} (2x - 5) = 1$ using the formal definition of the limit. The largest value of $\delta > 0$ so that the formal definition of the limit holds is:

- A. $\delta = \frac{\epsilon}{5}$
- B. $\delta = \frac{\epsilon}{2}$
- C. $\delta = 2\epsilon$
- D. $\delta = 5\epsilon$
- E. None of the above.

$a=3, f(x), L=1$
 $|f(x) - 1| < \epsilon$
 $\Leftrightarrow |2x - 5 - 1| < \epsilon$
 $\Leftrightarrow |2x - 6| < \epsilon$
 $\Leftrightarrow |2(x-3)| < \epsilon$
 $\Leftrightarrow 2|x-3| < \epsilon$
 $\Leftrightarrow |x-3| < \frac{\epsilon}{2}$
 $\Rightarrow \delta = \frac{\epsilon}{2}$

9. (7 points) Find the following limit: $\lim_{x \rightarrow -2} \frac{-x + 3}{x^2 + 2x - 15}$

- A. $-\frac{1}{5}$
- B. $-\frac{1}{3}$
- C. $\frac{1}{3}$
- D. $\frac{1}{5}$
- E. None of the above.

Plug in -2

$$= \frac{-(-2) + 3}{(-2)^2 + 2(-2) - 15} = \frac{4 + 3}{4 - 4 - 15} = \frac{7}{-15}$$

10. (7 points) Find the following limit: $\lim_{x \rightarrow -3} \frac{x^2 - 9}{x^2 + 2x - 3} = \frac{(-3)^2 - 9}{(-3)^2 + 2(-3) - 3} = \frac{0}{0}$

- A. 0
- B. $\frac{3}{2}$
- C. 3
- D. ∞
- E. None of the above.

Plug -3 in

Factorize

$$\frac{(x-3)(x+3)}{(x+3)(x-1)} = \frac{x-3}{x-1}$$

Plug in

$$\lim_{x \rightarrow -3} \frac{x-3}{x-1} = \frac{(-3)-3}{(-3)-1} = \frac{-6}{-4} = \frac{3}{2}$$

*** 11. (7 points) Find the following limit: $\lim_{x \rightarrow 9} \frac{\sin(\sqrt{x} - 3)}{x - 9} = \lim_{x \rightarrow 9} \frac{\sin(\sqrt{x} - 3)}{\sqrt{x} - 3} \cdot \frac{\sqrt{x} - 3}{x - 9}$

- A. 0
- B. $\frac{1}{3 + \sqrt{3}}$
- C. $\frac{1}{6}$
- D. ∞
- E. None of the above.

$$= 1 \cdot \lim_{x \rightarrow 9} \frac{\sqrt{x} - 3}{(\sqrt{x} + 3)(\sqrt{x} - 3)}$$

$$= 1 \cdot \lim_{x \rightarrow 9} \frac{1}{\sqrt{x} + 3}$$

$$= \frac{1}{\sqrt{9} + 3} = \frac{1}{3 + 3} = \frac{1}{6}$$

12. (7 points) Given the equation $x^2 + 2xy - y^2 + x = 2$, find $\frac{dy}{dx}$.

A. $4x + 1$
 B. $\frac{-1-2x-2y}{2x-2y}$ ✓
 C. $\frac{1-2x-2y}{2x-2y}$
 D. $\frac{1-x-y}{y-x}$
 E. None of the above.

$$(x^2 + 2xy - y^2 + x)' = 2'$$

$$\Rightarrow 2x + (2x)' \cdot y + 2x \cdot y' - 2 \cdot y \cdot y' + 1 = 0$$


$$\Rightarrow 2x + 2 \cdot y + 2x \cdot y' - 2y \cdot y' + 1 = 0$$

$$(2x - 2y) \cdot y' = -2x - 2y - 1$$

$$\Rightarrow y' = \frac{-2x - 2y - 1}{2x - 2y}$$

13. (7 points) If the volume of a sphere is increasing at a constant rate of $6 \text{ m}^3/\text{s}$, how fast is its radius increasing when the radius is 3 m ?

A. 6π
 B. $\frac{6}{\pi}$
 C. $\frac{\pi}{6}$
 D. $\frac{1}{6\pi}$ ✓
 E. None of the above.



$$V = \frac{4}{3}\pi r^3, \quad V' = 6$$

$$r = 3$$

$$V' = \frac{4}{3}\pi \cdot 3 \cdot r^2 \cdot r'$$

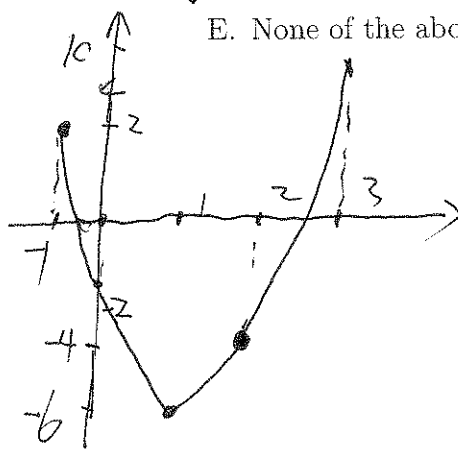
Plug in: $6 = \frac{4}{3}\pi \cdot 3 \cdot 3^2 \cdot r'$

Solve for r' : $r' = \frac{6}{4\pi \cdot 9} = \frac{1}{6\pi}$

14. (7 points) On which interval(s) there must be a zero of the function $f(x) = x^3 - 5x - 2$?

A. Only $(-1, 0)$
 B. Only $(0, 1)$
 C. $(0, 1)$ and $(2, 3)$
 D. $(-1, 0)$ and $(2, 3)$ ✓
 E. None of the above.

\Rightarrow On which interval(s) there must be a c st.
 $f(c) = 0 \quad (N=0)$



$f(-1) = -1 - 5(-1) - 2 = -1 + 5 - 2 = 2$
 $f(0) = 0 - 0 - 2 = -2$
 $f(1) = 1 - 5 - 2 = -6$
 $f(2) = 2^3 - 5 \cdot 2 - 2 = -4$
 $f(3) = 3^3 - 5 \cdot 3 - 2 = 10$