

# Midterm Exam 4

Math 132-06, Fall 2005

You have 50 minutes. No notes, no books, no calculators. **You must show all work to receive credit!** Good luck!

Name: Solutions

ID #: \_\_\_\_\_

1. \_\_\_\_\_ (/40 points)

2. \_\_\_\_\_ (/15 points)

3. \_\_\_\_\_ (/15 points)

4. \_\_\_\_\_ (/15 points)

5. \_\_\_\_\_ (/15 points)

Total \_\_\_\_\_ (/100 points)

Test Average \_\_\_\_\_

Gateway Points \_\_\_\_\_

Course Average \_\_\_\_\_

1. [40 points] Compute the following definite and indefinite integrals.

$$\begin{aligned} \text{(a) [10 points]} \int \frac{x^2 - 2}{\sqrt{x}} dx &= \int \frac{x^2}{\sqrt{x}} - \frac{2}{\sqrt{x}} dx \\ &= \int x^{3/2} - 2x^{-1/2} dx \\ &= \frac{2}{5} x^{5/2} - 4x^{1/2} + C \end{aligned}$$

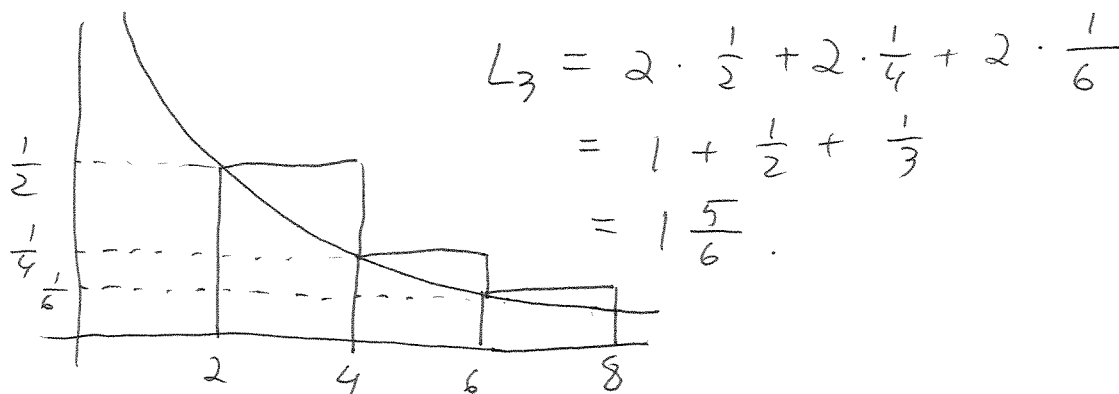
$$\begin{aligned} \text{(b) [10 points]} \int \frac{x^2}{(16 - x^3)^2} dx &= \int \frac{1}{-3u^2} du \\ u = 16 - x^3 & \\ du = -3x^2 dx & \\ \frac{du}{-3} = x^2 dx & \\ &= \frac{1}{-3} \cdot -u^{-1} + C \\ &= \frac{1}{3(16 - x^3)} + C \end{aligned}$$

$$\begin{aligned} \text{(c) [10 points]} \int_0^{\pi/4} \sqrt{\tan x} \sec^2 x dx &= \int_0^1 \sqrt{u} du \\ u = \tan x & \\ du = \sec^2 x & \\ x = 0 \rightarrow u = 0 & \\ x = \frac{\pi}{4} \rightarrow u = 1 & \\ &= \frac{2}{3} u^{3/2} \Big|_0^1 \\ &= \frac{2}{3} (1) - \frac{2}{3} (0) \\ &= \frac{2}{3} . \end{aligned}$$

$$\begin{aligned} \text{(d) [10 points]} \int_{-1}^1 |x| + x^2 dx &= \int_{-1}^0 -x + x^2 dx + \int_0^1 x + x^2 dx \\ &= \left[ -\frac{x^2}{2} + \frac{x^3}{3} \right]_{-1}^0 + \left[ \frac{x^2}{2} + \frac{x^3}{3} \right]_0^1 \\ &= \left( \frac{0}{2} + \frac{0}{3} \right) - \left( \frac{-1}{2} + \frac{-1}{3} \right) + \left( \frac{1}{2} + \frac{1}{3} \right) - (0 + 0) \\ &= \frac{1}{2} + \frac{1}{3} + \frac{1}{2} + \frac{1}{3} = 1 \frac{2}{3} . \end{aligned}$$

2. [12 points] Consider the function  $f(x) = \frac{1}{x}$  on the interval  $[2, 8]$ .

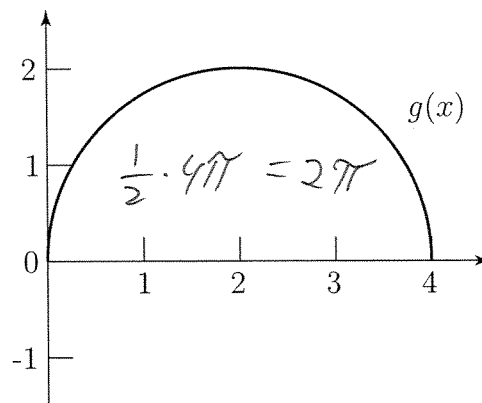
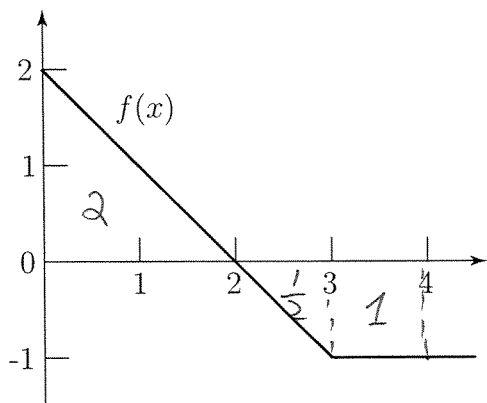
(b) [9 points] Compute  $L_3$ , the left-hand estimate for  $\int_2^8 \frac{1}{x} dx$  using 3 rectangles.



(b) [6 points] Is this an over- or under-estimate? Explain.

This is an ~~under~~ over-estimate. The function  $f(x) = \frac{1}{x}$  is decreasing, so the rectangles from the left endpoint approximation are taller than the actual function.

3. [15 points] Below are the graphs of two functions,  $f$  and  $g$ .



Compute the following definite integrals.

$$\begin{aligned}
 \text{(a) [5 points]} \int_0^4 f(x) + 2g(x) dx &= \int_0^4 f(x) dx + 2 \int_0^4 g(x) dx \\
 &= 2 - \frac{1}{2} - 1 + 2 \cdot 2\pi \\
 &= \frac{1}{2} + 4\pi.
 \end{aligned}$$

$$\begin{aligned}
 \text{(b) [5 points]} \int_2^1 f(x) dx &= - \int_1^2 f(x) dx \\
 &= -\frac{1}{2}.
 \end{aligned}$$

$$\text{(c) [5 points]} \int_1^1 f(x)g(x) dx = 0.$$

$$\int_a^a (\text{any function}) dx = 0.$$

4. [15 points] Compute the derivatives of the following functions. You don't have to simplify.

(a) [8 points]  $f(x) = \int_1^x (t^2 - 3t)^5 dt$

$$f'(x) = (x^2 - 3x)^5$$

(b) [7 points]  $g(x) = \int_0^{\sin x} t \cos(t) dt$

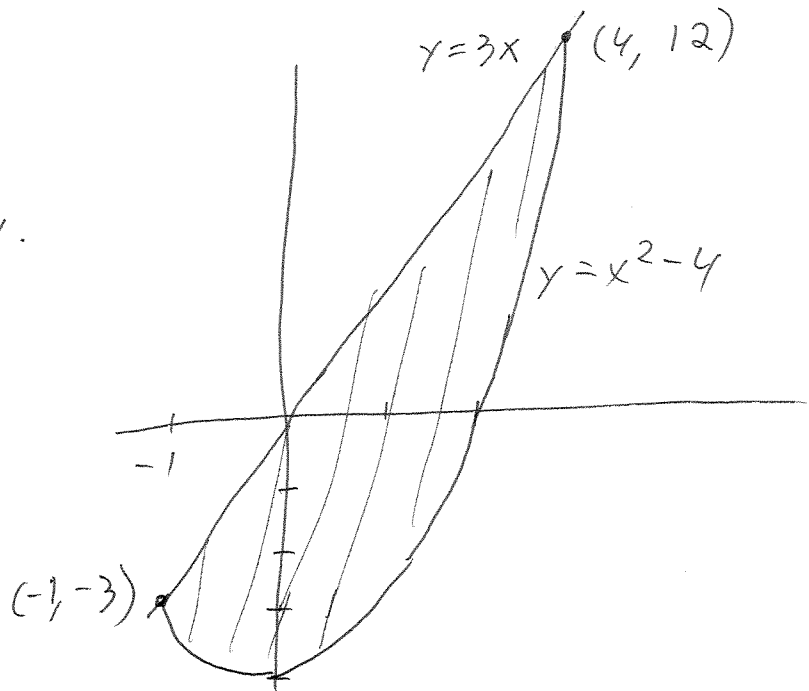
$$\frac{dg}{du} = u \cdot \cos(u). \quad \frac{du}{dx} = \cos(x)$$

$$\begin{aligned} \frac{dg}{dx} &= \frac{dg}{du} \cdot \frac{du}{dx} = u \cos(u) \cdot \cos(x) \\ &= \sin(x) \cdot \cos(\sin x) \cdot \cos(x). \end{aligned}$$

5. [15 points] Let  $R$  be the region enclosed between the graphs of  $y = 3x$  and  $y = x^2 - 4$ .

(a) [7 points] Sketch a graph of  $R$  and label the points of intersection of the two curves.

$$\begin{aligned} 3x &= x^2 - 4 \\ x^2 - 3x - 4 &= 0 \\ (x+1)(x-4) &= 0 \\ x &= -1 \quad \text{or} \quad x = 4. \end{aligned}$$



(b) [8 points] What is the area of  $R$ ?

$$\begin{aligned} A &= \int_{-1}^4 3x - (x^2 - 4) dx \\ &= \int_{-1}^4 3x - x^2 + 4 dx \\ &= \left[ \frac{3}{2}x^2 - \frac{1}{3}x^3 + 4x \right]_{-1}^4 \\ &= \left[ \frac{3}{2}(16) - \frac{1}{3}(64) + 16 \right] - \left[ \frac{3}{2}(+1) - \frac{1}{3}(-1) + 4(-1) \right] \\ &= 24 - \frac{64}{3} + 16 - \frac{3}{2} - \frac{1}{3} + 4 \\ &= 44 - \frac{65}{3} - \frac{3}{2} \\ &= 20 \frac{5}{6} \quad \left( = \frac{125}{6} \right) \end{aligned}$$