

§2.1. Derivatives

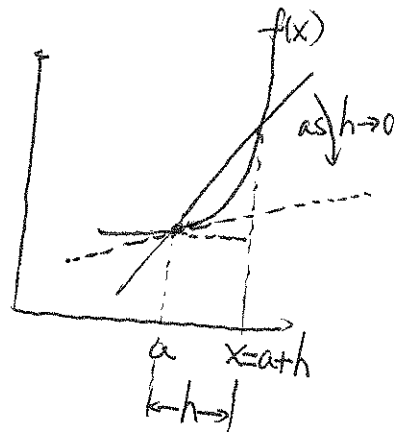
key points: ① Definition of Derivative: as a limit of average rate of change.

② Slope of tangent line as a derivative and the formula of tangent line.

③ Left and right derivatives of piecewise functions.

• Definition: The derivative of a function $f(x)$ at $x=a$, denoted $f'(a)$,

given by:
$$f'(a) = \lim_{h \rightarrow 0} \frac{f(a+h) - f(a)}{h}$$



• Remark 1: If we write $h = x - a \Leftrightarrow x = a+h$, then $h \rightarrow 0$ (h approaches 0)

is equivalent to $x-a \rightarrow 0 \Leftrightarrow x \rightarrow a$ (x approaches a).

So $f'(a)$ can also be defined as

$$f'(a) = \lim_{x \rightarrow a} \frac{f(x) - f(a)}{x - a}$$

• Remark 2: Notice that the above ratios are actually the average rate of change of the function over the interval $[a, a+h] = [a, x]$, which is the slope of the secant line. And the limit will be the slope of the tangent line passing through $(a, f(a))$, i.e., the slope of the tangent line $= f'(a)$.

eg. 1: let $f(x) = \frac{1}{x+1}$. Find $f'(2)$ and the formula of the tangent line through $(2, f(2))$.

solution:
$$f'(2) = \lim_{h \rightarrow 0} \frac{f(2+h) - f(2)}{h} = \lim_{h \rightarrow 0} \frac{\frac{1}{2+h+1} - \frac{1}{2+1}}{h} \quad (\text{simplify})$$

$$= \lim_{h \rightarrow 0} \frac{\frac{3 - (3+h)}{(3+h) \cdot 3}}{h} = \lim_{h \rightarrow 0} \frac{-h}{(3+h) \cdot 3 \cdot h} \quad \text{Hint: } \frac{a}{c} = \frac{a}{b \cdot c}$$

Notice $f(2) = \frac{1}{2+1} = \frac{1}{3}$.

Tangent line: through $(2, \frac{1}{3})$ with slope $f'(2) = -\frac{1}{9}$.

$$= \lim_{h \rightarrow 0} \frac{-1}{(3+h) \cdot 3} = \boxed{-\frac{1}{9}} \quad (\text{Plug in } h=0)$$

has formula:
$$y - \frac{1}{3} = -\frac{1}{9} \cdot (x - 2)$$

eg 2. Find $f'(0)$ for $f(x) = \sqrt{1-x}$.

$$\begin{aligned} \text{Solution: } f'(0) &= \lim_{h \rightarrow 0} \frac{f(0+h) - f(0)}{h} = \lim_{h \rightarrow 0} \frac{\sqrt{1-(0+h)} - \sqrt{1-0}}{h} \\ &= \lim_{h \rightarrow 0} \frac{\sqrt{1-h} - 1}{h} \end{aligned}$$

★ (Conjugation Method)

$$\begin{aligned} \sqrt{1-h} - 1 &= \frac{(\sqrt{1-h} - 1) \times (\sqrt{1-h} + 1)}{\sqrt{1-h} + 1} \\ &= \frac{(\sqrt{1-h} - 1)(\sqrt{1-h} + 1)}{\sqrt{1-h} + 1} = \frac{(\sqrt{1-h})^2 - 1^2}{\sqrt{1-h} + 1} \\ &= \frac{1-h-1}{\sqrt{1-h} + 1} = \frac{-h}{\sqrt{1-h} + 1} \end{aligned}$$

$$\text{Therefore, } f'(0) = \lim_{h \rightarrow 0} \frac{\frac{-h}{\sqrt{1-h} + 1}}{h} = \lim_{h \rightarrow 0} \frac{-1}{\sqrt{1-h} + 1} = \boxed{\frac{-1}{2}} \quad (\text{Plug in } h=0)$$

Notice that if we plug in $h=0$, we have $\frac{0}{0}$. So we need to simplify the numerator first.

Remark: $\sqrt{A} + \sqrt{B}$ is called the conjugate radical of $\sqrt{A} - \sqrt{B}$. Notice that $(\sqrt{A} - \sqrt{B})(\sqrt{A} + \sqrt{B}) = (\sqrt{A})^2 - (\sqrt{B})^2 = A - B$ helps remove the square root.

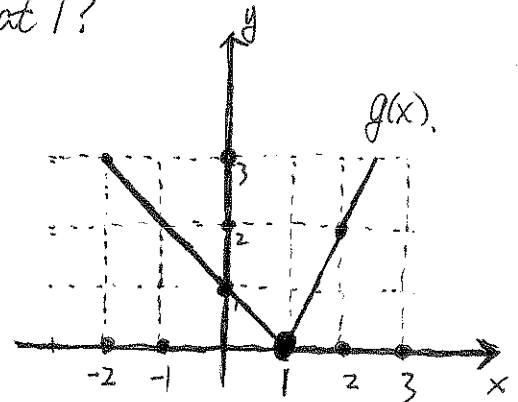
- $\lim_{h \rightarrow 0^-} \frac{f(a+h) - f(a)}{h}$ and $\lim_{h \rightarrow 0^+} \frac{f(a+h) - f(a)}{h}$ are called left and right derivatives of $f(x)$ at a .
- If $\lim_{h \rightarrow 0} \frac{f(a+h) - f(a)}{h}$ does not exist, we say $f(x)$ does not have derivative at a .
- Linear function $y = kx + b$ has derivative k at every point, since all the secant lines are the same. The tangent line is the line itself.

eg 3. Given the graph of $g(x)$. Does $g(x)$ have derivative at 1?

Solution: Based on the geometric meaning of derivative, the left and right derivatives of $g(x)$ at $x=1$ are exactly the two slopes of the two straight lines,

$$\text{i.e. } \lim_{h \rightarrow 0^-} \frac{g(1+h) - g(1)}{h} = -1$$

$$\lim_{h \rightarrow 0^+} \frac{g(1+h) - g(1)}{h} = 2$$



left and right limits (derivatives) are not the same, therefore, $\lim_{h \rightarrow 0} \frac{g(1+h) - g(1)}{h}$ D.N.E., $g(x)$ does not have derivative at $x=1$.

§ 2.2 Derivative Function

Key points: ① Compute $f'(x)$ via limit definition of derivative.

② Graph $f'(x)$ based on the graph of $f(x)$.

Replace a by x in $f'(a)$ and consider it as a new function of x , i.e.

Def: $f'(x) = \lim_{h \rightarrow 0} \frac{f(x+h) - f(x)}{h} = \lim_{z \rightarrow x} \frac{f(z) - f(x)}{z - x}$ is called the derivative function.

Remarks: • The domain of $f'(x)$ is where $f(x)$ has derivative.

• The process of computing $f'(x)$ is also called differentiate $f(x)$.

• If $f'(a)$ exists (at $x=a$), we say $f(x)$ is differentiable at a .

• We also have the following notations for derivative:

$$f'(x) = \frac{df}{dx}, \quad f'(a) = \left. \frac{df}{dx} \right|_{x=a}$$

• Differentiable is stronger than continuous: If $f(x)$ is differentiable at a , then $f(x)$ is continuous at a , not vice versa.

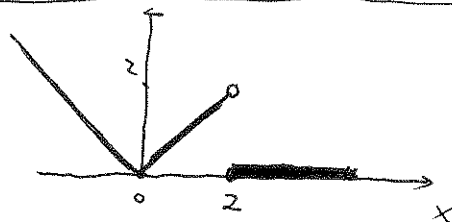
eg. 1. True or False: $f(x) = \begin{cases} |x| & \text{if } x < 2 \\ 0 & \text{if } x \geq 2 \end{cases}$

(S16)

(I) $f(x)$ is differentiable at $x=0$. (False)

(II) $f(x)$ is continuous at $x=2$. (False)

(III) $\lim_{x \rightarrow 0} f(x)$ exists.



eg. 2. Compute $r'(t)$ for $r(t) = 3t + \frac{5}{t}$.

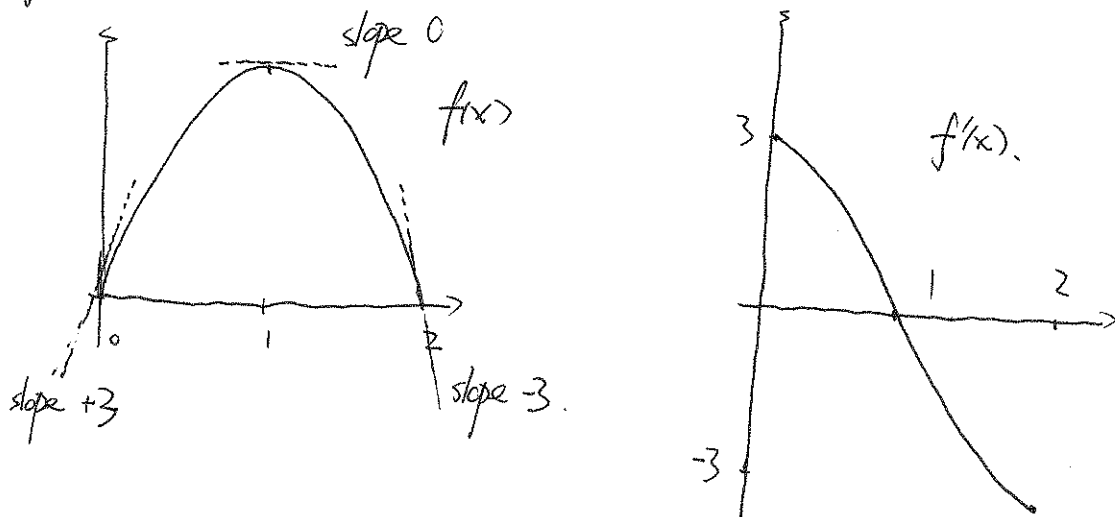
Solution: $r'(t) = \lim_{h \rightarrow 0} \frac{r(t+h) - r(t)}{h}$

(think $r(t)$ as $f(x)$, where t plays the role of x)

$$= \lim_{h \rightarrow 0} \frac{[3(t+h) + \frac{5}{t+h}] - [3t + \frac{5}{t}]}{h}$$

$$= \lim_{h \rightarrow 0} \frac{\cancel{3t} + 3h - \cancel{3t} + \frac{5}{t+h} - \frac{5}{t}}{h} = \lim_{h \rightarrow 0} \frac{3h}{h} + \frac{\frac{5t - 5(t+h)}{(t+h)t}}{h} = \lim_{h \rightarrow 0} 3 - \frac{5}{(t+h)t} = \boxed{3 - \frac{5}{t^2}}$$

eg 3. For the function $f(x)$ shown below, sketch the graph of $f'(x)$.



eg 4. Consider $f(x) = \sqrt{1-2x}$. Find $f'(x)$ (via definition) and find an equation of (T/L) a tangent line of $f(x)$ at $x = -4$.

Solution: (a) $f'(x) = \lim_{h \rightarrow 0} \frac{f(x+h) - f(x)}{h} = \lim_{h \rightarrow 0} \frac{\sqrt{1-2(x+h)} - \sqrt{1-2x}}{h}$ (conjugation method in Ex. 1)

$$\begin{aligned} \sqrt{1-2(x+h)} - \sqrt{1-2x} &= \frac{(\sqrt{1-2(x+h)} - \sqrt{1-2x})(\sqrt{1-2(x+h)} + \sqrt{1-2x})}{\sqrt{1-2(x+h)} + \sqrt{1-2x}} \\ &= \frac{[1-2(x+h)] - [1-2x]}{\sqrt{1-2(x+h)} + \sqrt{1-2x}} = \frac{-2h}{\sqrt{1-2(x+h)} + \sqrt{1-2x}} \end{aligned}$$

$$\text{Therefore, } f'(x) = \lim_{h \rightarrow 0} \frac{\frac{-2h}{\sqrt{1-2(x+h)} + \sqrt{1-2x}}}{h} = \lim_{h \rightarrow 0} \frac{-2}{\sqrt{1-2(x+h)} + \sqrt{1-2x}} \xrightarrow{\text{plug in } h=0} \frac{-2}{\sqrt{1-2x} + \sqrt{1-2x}}$$

$$(b) \text{ slope of the tangent line at } x = -4? \quad = \boxed{\frac{-1}{\sqrt{1-2x}}}$$

$$f'(-4) = \frac{-1}{\sqrt{1-2(-4)}} = \frac{-1}{\sqrt{1+8}} = \frac{-1}{\sqrt{9}} = \frac{-1}{3}$$

passing through the point $(-4, f(-4)) = (-4, \sqrt{1-2(-4)}) = (-4, 3)$.

$$\text{Equation: } y - 3 = -\frac{1}{3} \cdot (x - (-4))$$

$$\boxed{y - 3 = -\frac{1}{3} \cdot (x + 4)}$$